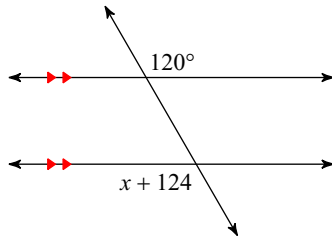


Parallel Lines and Transversal Properties

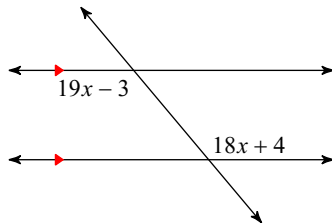
Date _____

Identify the angle pair name and their property. Write an equation. Solve for x .

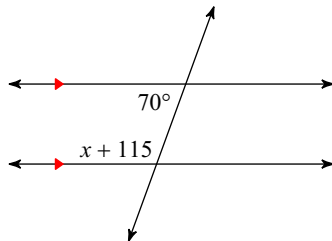
1)



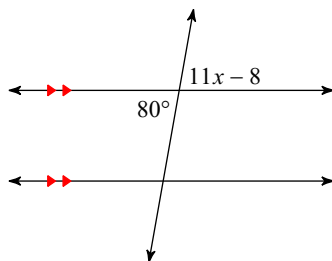
2)



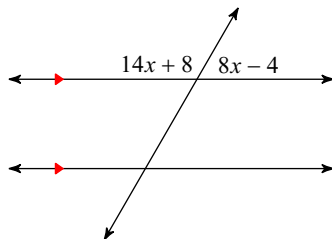
3)



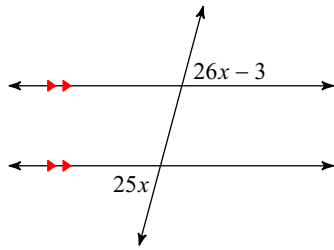
4)



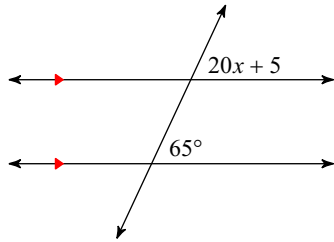
5)



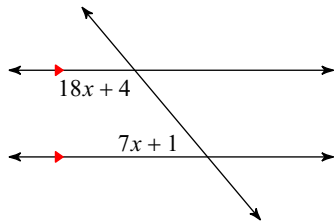
6)



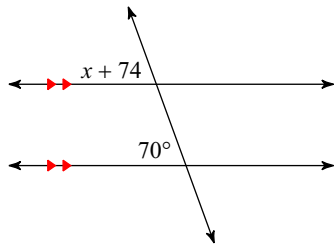
7)



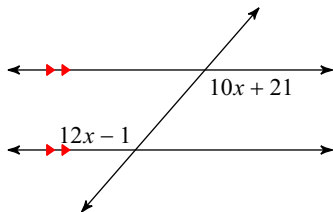
8)



9)



10)



Answers to Parallel Lines and Transversal Properties

1) -4

2) 7

3) -5

4) 8

5) 8

6) 3

7) 3

8) 7

9) -4

10) 11