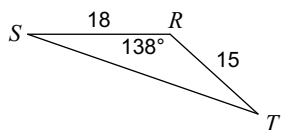
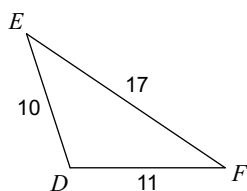
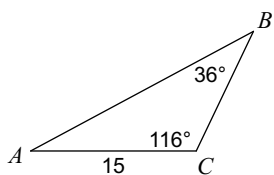


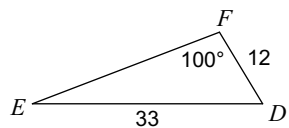
Geometry: Day Two Exit HW

Date _____

Find each measurement indicated. Round sides to the nearest tenth and angles to the nearest degree.

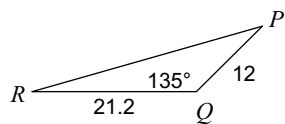
1) Find ST 2) Find $m\angle F$ 3) Find AB 

4) Find $m\angle E$



Solve the triangle. Round your sides to the nearest tenth, angles to the nearest degree.

5)



Answers to Geometry: Day Two Exit HW

- 1) 30.8 2) 34° 3) 22.9 4) 21°
5) $m\angle R = 16^\circ$, $m\angle P = 29^\circ$, $q = 30.9$